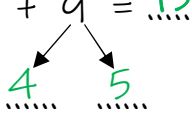
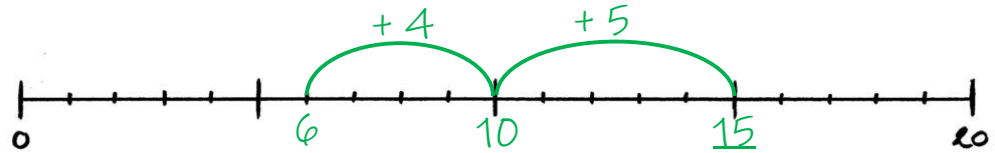


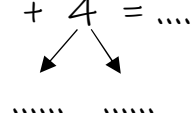
Werkblad

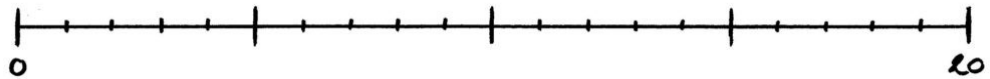
Rijgend rekenen bij optelsommen

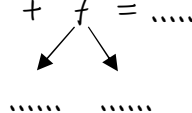
Kijk naar de som. Je gaat rijden via een tiental.
Splits het tweede getal, teken de bogen op de getallenlijn en kom al rijgend tot het antwoord.

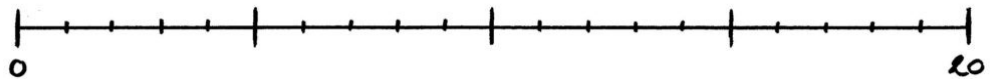
$$6 + 9 = 15$$


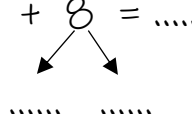


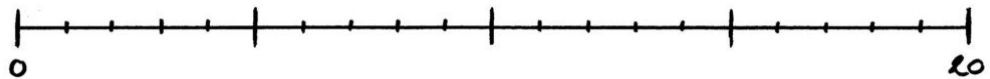
$$7 + 4 = \dots$$


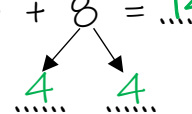


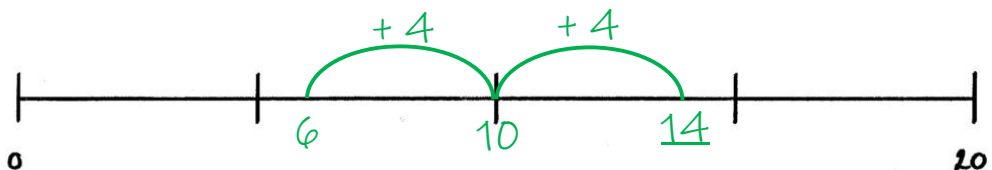
$$9 + 7 = \dots$$


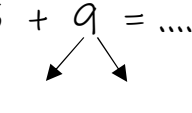


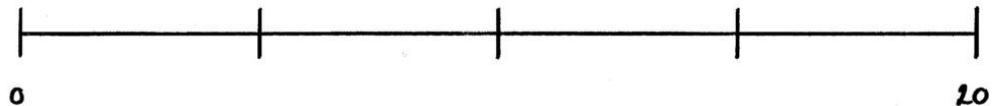
$$7 + 8 = \dots$$




$$6 + 8 = 14$$




$$5 + 9 = \dots$$




$$9 + 4 = \dots$$
